

S.V. INTERNATIONAL SCHOOL

GARHI SAMPLA


2014-15



HOLIDAYS HOMEWORK

CLASS – 4th

"SPECIAL HOLIDAYS"



We're thinking of you this time of year

Wishing you happiness, joy and cheer.

May all your days be warm and bright,

And your delectable holiday foods,

As parties and gifts create holiday moods.

Favorite people play a meaningful part,

While treasured rituals warm your heart.

You are special to us in many ways,

So we wish you

Happy Holidays!

DO ALL THIS WORK IN HOLIDAY HOMEWORK NOTEBOOK AND SCRAPBOOK

English

Literature:

- ❖ Learn Chapter – 1, 2, 3 (poem)

Grammar:

- ❖ Make a beautiful dictionary of your own having 10 words of each alphabet from Lesson -1 to Lesson – 3.
- ❖ Pick out 20 nouns, 20 pronouns and write them beautifully in your scrap book.

Science

- ❖ Learn Lesson – 1, 2 (complete with exercise)

Activity:

- ❖ Grow a flower plant in a pot and take care of it well in summer vacations and bring it back to school after vacations.
- ❖ Make a chart on life cycle of frog.
- ❖ Paste the following pictures in scrap book
 - 5 different types of leaves
 - 5 different types of flowers.
 - Paste the picture of different animals living in different habitates.
- ❖ Paste the pictures of desert plants terrestrial plants aquatic plants in scrap book.

Social Science

- ❖ Collect the picture of Road transport, Air transport and Water transport and paste them in scrap book.
- ❖ Collect the picture of any three leader of India and write 10 lines about each in scrap book.
- ❖ Paste the picture of 3 main seasons of India (Summer, Winter and Rainy) and write 3 lines on each in scrap book.
- ❖ Visit any Historical Monument in vacations. Paste the picture of it in scrap book and write 10 lines about it.
- ❖ Buy a small globe from stationary shop. Study the globe and write any 10 countries name from it.
- ❖ Learn Lesson – 1 to Lesson – 4.

Hindi

- * राष्ट्रभाषा हिन्दी पाठ्य पुस्तक कविता "मित्र बना ले हम पेड़ों को"
का सुन्दर सा चित्र पैड़ का बनाकर उँगलियों की छाप
से रंग भरो। यह कार्य कार्ड पेपर पर बनाओ।
- * प्रतिदिन एक सुलेख लिखो जिस पर दिनांक भी लिखो ?
याह। से पत्रक यदी व याद करो।
- * किसी एक ऐतिहासिक स्थल का भ्रमण करो और उसके
बारे में 4 वाक्य लिखो ? चित्र भी लगाओ यह कार्य
Scrap-Book में करो।

(Note: - The School will reopen on 1st July after summer break.)

Mystery Number

Who am I?

I am a 4-digit number

All my digits are same

The sum of all four digits is 28

I am the number _____



It is a 3-digit number

The digit at ones place is 3 less than 9

The digit at tens place is 2 more than 4

The digit at hundreds place is 4 less than 8

I m the number _____

I am a 4-digit number

The digit at tens place is 3

The digit at ones place is double of the digit at tens place

The digit at hundreds place is 2 less than 8

The digit at thousands place is the sum of the digits at ones and tens place

I am the number _____

- Find the total bill in each case. Also find the money due in this bill. If Rs.200 were given to the shopkeeper, then how much money will he return?

Bill	
Tiffin Box	Rs.355
Water bottle	Rs.28
School bag	Rs.125
Total	

Amount to be returned: _____

Bill	
Tennis Ball	Rs.35
Racquet	Rs.160
Tennis shoes	Rs.120
Socks	Rs.28
Total	

Paid:



Amount to be returned: _____

Bill	
Shirt	Rs.225
Trousers	Rs.305
Tie	Rs.105
Total	

Paid:



Amount to be returned: _____

Bill	
Umbrella	Rs.142
Raincoat	Rs.86
Total	

Paid:



Amount to be returned: _____

Q-1, Rewrite in the number names.

a. 2,937 people visited the zoo to see the white tiger. (example)

Two thousand nine hundred thirty seven people visited the zoo to see the white tiger.

b. About 4,560 people visited the trade fair in the first week.

c. There were 5,094 people in the stadium for the hockey match between India and Pakistan.

d. 2898 saplings were planted on the occasion of Earth Day in North Delhi.

e. Shiksha Public Library donated 1769 books to the orphanage.

f. Arya Publishing House got the order of 9060 diaries on New Year.

g. Suresh Raina has scored a total of 2,993 in ODI matches.

h. 6078 cars were fined for crossing the red light.

Solve these sums.

$$\begin{array}{r} 3000 \\ - 1852 \\ \hline \end{array}$$

$$\begin{array}{r} 7459 \\ + 2953 \\ \hline \end{array}$$

$$\begin{array}{r} 4392 \\ + 3986 \\ \hline \end{array}$$

$$\begin{array}{r} 5932 \\ + 3456 \\ \hline \end{array}$$

$$\begin{array}{r} 2330 \\ - 1202 \\ \hline \end{array}$$

$$\begin{array}{r} 6169 \\ + 3684 \\ \hline \end{array}$$

$$\begin{array}{r} 7960 \\ - 4613 \\ \hline \end{array}$$

$$\begin{array}{r} 3044 \\ + 1557 \\ \hline \end{array}$$

$$\begin{array}{r} 7292 \\ + 8788 \\ \hline \end{array}$$

$$\begin{array}{r} 6070 \\ - 4268 \\ \hline \end{array}$$

$$\begin{array}{r} 4003 \\ - 1872 \\ \hline \end{array}$$

$$\begin{array}{r} 6640 \\ + 3833 \\ \hline \end{array}$$

$$\begin{array}{r} 8000 \\ - 4533 \\ \hline \end{array}$$

$$\begin{array}{r} 3427 \\ + 9210 \\ \hline \end{array}$$

$$\begin{array}{r} 7359 \\ + 1186 \\ \hline \end{array}$$

$$\begin{array}{r} 3662 \\ - 2101 \\ \hline \end{array}$$



Color Me!

Shamlal- The postman

1. Shamlal, the postman goes to collect letters from different letter boxes at 10 AM. He went to Vasant Kunj and collected 987 letters from the first letter box, 739 letters from the second letter box and 864 letters from the third one. Before he goes to the next, he wanted to count the number of letters. How many letters did he collect from Vasant Kunj?

2. He then went to R.K.Puram and collected 655 letters from the first letter box, 78 letters from the second letter box, 237 from the third and 550 from the fourth one. How many letters did he collect from R.K.Puram?

3. How many letters did he collect from both the places?

4. He comes back to the post office and classifies the letters to stamp them and order them according to their places. He stamps 1854 letters to be delivered at Ramesh Nagar. How many letters still remain unstamped?

5. He then delivers 1200 letters to Greater Kailash, 990 letters to Defiance Colony. Are there any letters undelivered? If yes, can you tell how many?

6. He has 3 bags with the capacity of 2000, 1500 and 2200 letters. Which bag should he choose if he has to take the letters to Greater Kailash and Defiance Colony together?

7. The postman was very tired. He has taken 6 hours to collect and arrange the letters. At what time did he finish?

8. He felt very hungry by now. He went out with his friend to eat. They bought 3 plates of cholley kulche and 2 cups of tea. The cost of 1 plate of cholley kulche is Rs 23 and a cup of tea is Rs 4. He paid Rs 100. How much money should he get back?

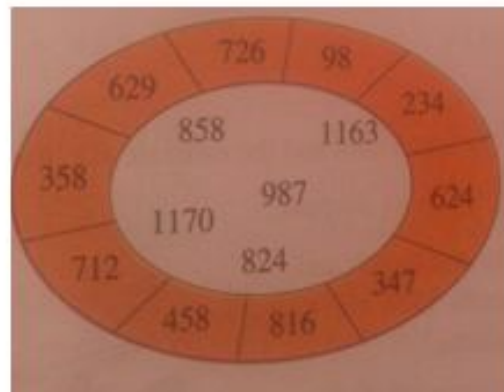
- The corner numbers add up to the number in the centre. Fill in the missing numbers.

(a)

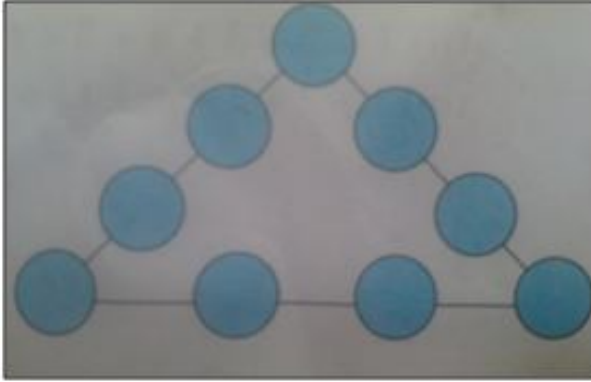
(b)

- Find the pairs of numbers in the outer circle that add up to make the numbers in the inner circle.

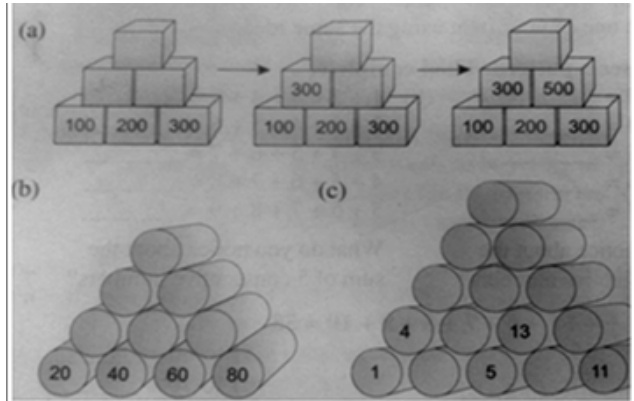
(a)(Eg)	712	+	358	=	1170
(b)		+		=	
(c)		+		=	
(d)		+		=	
(e)		+		=	



- Write a number 1,3,5,7,9,11,13,15, or 17 in each circle so that the sum of the numbers in each side of the triangle is exactly 30. Each number can be used only once.



- Look at the pattern to complete the towers.



Fill in the squares so that the products are correct on the right side and on the bottom. First one is done for you.

<table border="1" style="width: 100%; border-collapse: collapse;"> <tr> <td style="width: 50%; text-align: center;">4</td> <td style="width: 50%; text-align: center;">9</td> <td style="width: 50%;"></td> </tr> <tr> <td style="width: 50%; text-align: center;">1</td> <td style="width: 50%; text-align: center;">9</td> <td style="width: 50%; text-align: center;">36</td> </tr> <tr> <td style="width: 50%; text-align: center;">4</td> <td style="width: 50%; text-align: center;">81</td> <td style="width: 50%;"></td> </tr> </table>	4	9		1	9	36	4	81		<table border="1" style="width: 100%; border-collapse: collapse;"> <tr> <td style="width: 50%; text-align: center;">6</td> <td style="width: 50%; text-align: center;">8</td> <td style="width: 50%; text-align: center;">48</td> </tr> <tr> <td style="width: 50%;"></td> <td style="width: 50%;"></td> <td style="width: 50%; text-align: center;">27</td> </tr> <tr> <td style="width: 50%; text-align: center;">54</td> <td style="width: 50%; text-align: center;">24</td> <td style="width: 50%;"></td> </tr> </table>	6	8	48			27	54	24	
4	9																		
1	9	36																	
4	81																		
6	8	48																	
		27																	
54	24																		

<table border="1" style="width: 100%; border-collapse: collapse;"> <tr> <td style="width: 50%; text-align: center;">9</td> <td style="width: 50%;"></td> <td style="width: 50%; text-align: center;">12</td> </tr> <tr> <td style="width: 50%; text-align: center;">1</td> <td style="width: 50%;"></td> <td style="width: 50%; text-align: center;">5</td> </tr> <tr> <td style="width: 50%; text-align: center;">9</td> <td style="width: 50%; text-align: center;">40</td> <td style="width: 50%;"></td> </tr> </table>	9		12	1		5	9	40		<table border="1" style="width: 100%; border-collapse: collapse;"> <tr> <td style="width: 50%;"></td> <td style="width: 50%; text-align: center;">9</td> <td style="width: 50%; text-align: center;">54</td> </tr> <tr> <td style="width: 50%; text-align: center;">1</td> <td style="width: 50%;"></td> <td style="width: 50%; text-align: center;">7</td> </tr> <tr> <td style="width: 50%;"></td> <td style="width: 50%;"></td> <td style="width: 50%;"></td> </tr> </table>		9	54	1		7			
9		12																	
1		5																	
9	40																		
	9	54																	
1		7																	